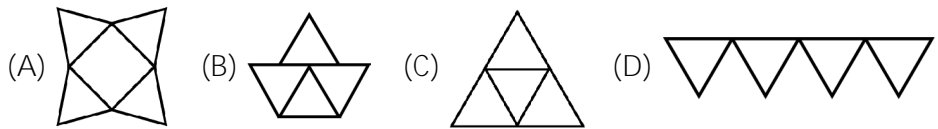
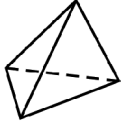




Class: 6
Maximum Marks: 25
Time: 35 Min.

1. How does it look, when opened out? []



2. If $40 + 10 = 30$, $18 + 8 = 10$, then $60 + 60 = ?$ []

(A) 120 (B) 3600 (C) 0 (D) 90

3. Identify the mirror image. QUALITY []

(A) QNALITY (B) YTIJAUQ (C) YTILAUQ (D) YTILAUO

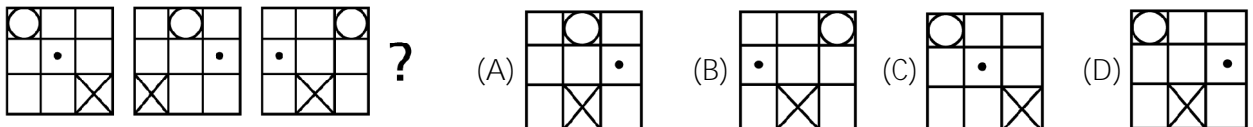
4. If DELHI can be coded as CCIDD, then how would you code BOMBAY? []

(A) AJMTVT (B) AMJXVS (C) MJXVSU (D) WXYZAX

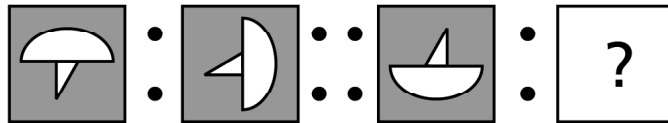
5. How does the shape look when folded along the dotted line? []



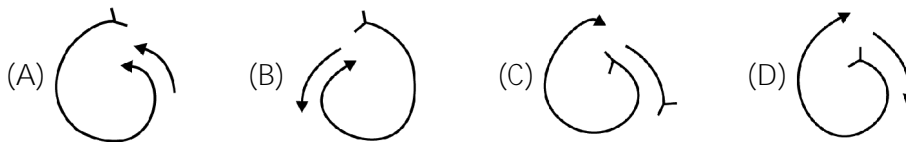
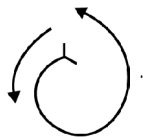
6. What comes next? []




7. Which pattern completes the second pair in the same way as the first pair? []



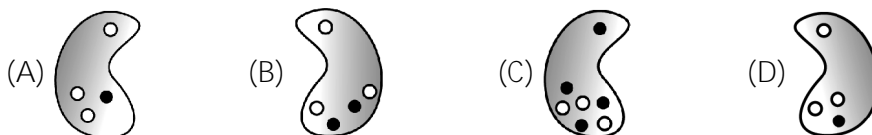
8. Identify the mirror image of the figure []



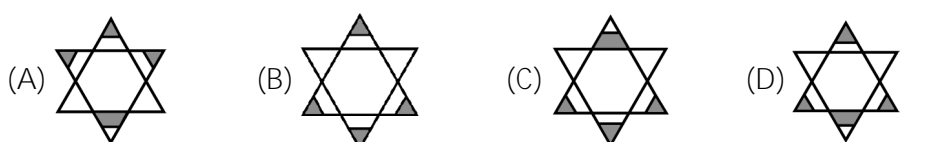
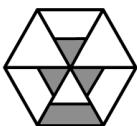
9. Which number will replace the question mark in the following question? []



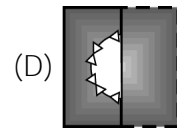
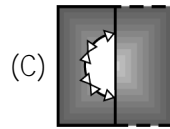
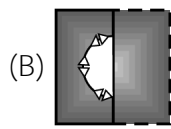
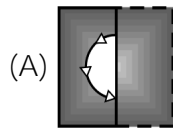
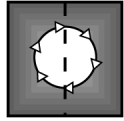
10. Which is different from the others? []



11. When flaps open out, how does the shape look? []



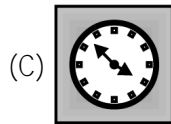
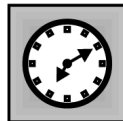
12. How does the shape look when folded along the dotted line? []



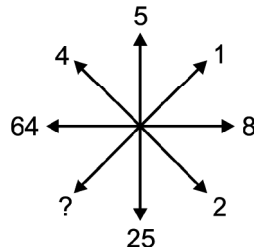
Directions for 13 - 14: Read the following information carefully and answer the questions given below it:

- i. There is a family of six members A, B, C, D, E and F.
 - ii. There are two married couples in the family and the family members represent three generations.
 - iii. Each member has a distinct choice of a colour amongst green, yellow, black, red, white and pink.
 - iv. No lady member likes either green or white.
 - v. C, who likes black color is the daughter-in-law of E.
 - vi. B is brother of F and son of D and likes pink.
13. Which of the following is the colour preference of A? []
 (A) Red (B) Yellow
 (C) Either Red or Yellow (D) Cannot be determined
14. How many male members are there in the family? []
 (A) Two (B) Three
 (C) Four (D) Cannot be determined

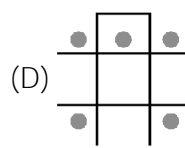
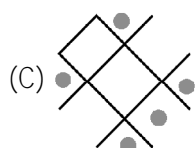
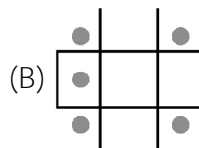
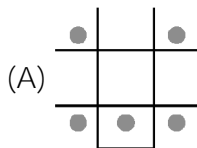
15. Identify the mirror image of the figure []



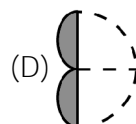
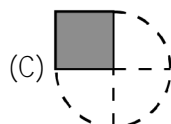
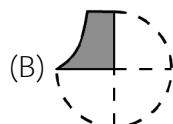
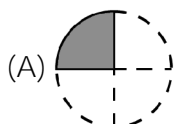
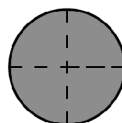
16. Which number will replace the question mark in the following? []



- (A) 1 (B) 2 (C) 3 (D) 4
17. Which is the odd one out? []



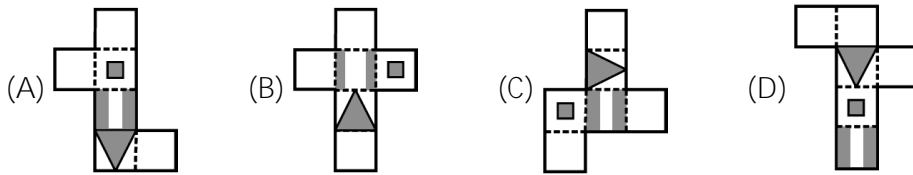
18. How does the shape look when folded along the dotted line? []



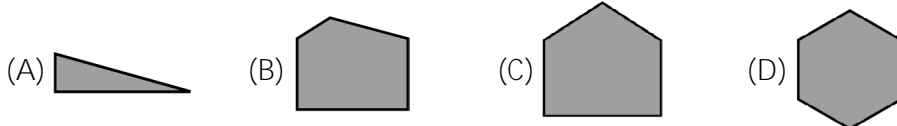
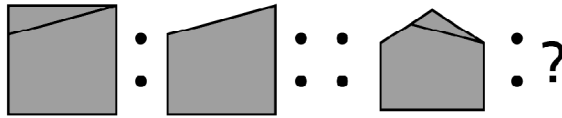
19. In a certain language, SIGHT is written as VLJKW. How is REVEAL written in the same language? []

- (A) UHYHDO (B) ODHYHU (C) FSJSOZ (D) UHYHDL

20. How does the shape look when opened out? []



21. Which pattern completes the second pair in the same way as the first pair? []



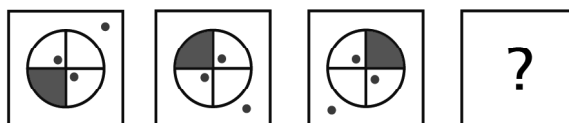
22. Find the figure which comes next in the series. []



23. Identify the mirror image of the figure. []



24. What comes next? []



25. How does the shape look when folded along the dotted line? []

