



**Class: 5**
**Maximum Marks: 25**
**Time: 35 Min.**

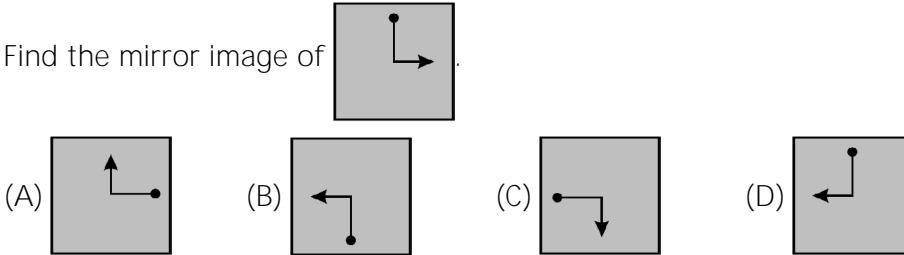
1. Which is the next figure in the series?

[   ]




2. Find the mirror image of

[   ]



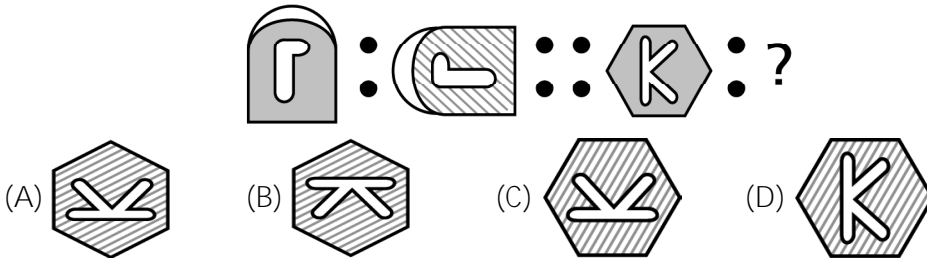
3. Find the mirror image of

[   ]



4. Which shape or pattern completes the second pair in the same way as the first pair ?

[   ]



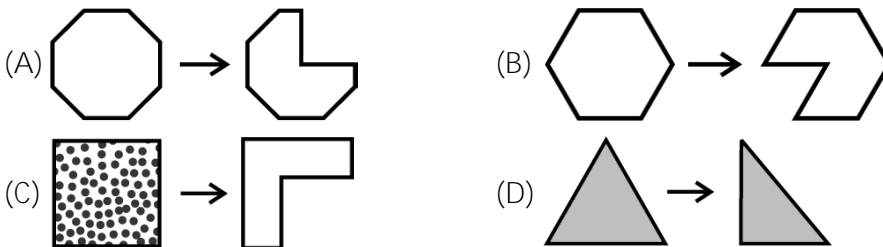
5. In a row of girls, Suhana is fifth from the left and Preeti is sixth from the right. When they exchange their positions, then Suhana will be thirteenth from the left. What will be Preeti's position from the right?

[   ]

 (A) 7<sup>th</sup>                      (B) 11<sup>th</sup>                      (C) 14<sup>th</sup>                      (D) 18<sup>th</sup>

6. Which pair of shapes is the odd one ?

[   ]



7. How many numbers are there which are preceded by 2 and followed by 5 in this series?

[   ]

5 2 4 3 2 1 6 5 3 2 1 5 2 4 5 6 8 9

(A) 1                      (B) 2                      (C) 4                      (D) 5

8. If the code for ROSE is 6821, code for CHAIR is 73456 and code of PREACH is 961473, then what will be the code for SEARCH?

[   ]

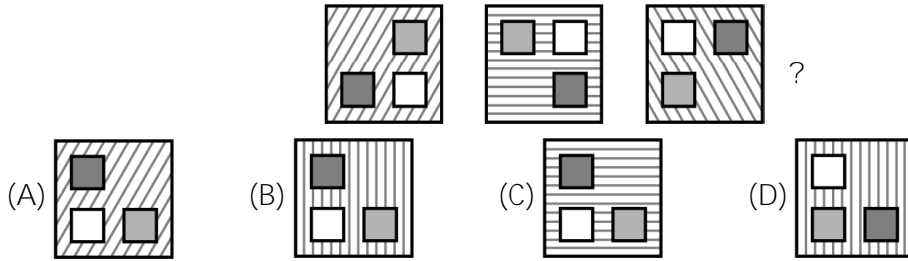
(A) 246173                      (B) 214673                      (C) 214763                      (D) 216473

9. If every alternate letter of the English alphabet from B onwards (including B) is written in lower case (small letters) and the remaining letters are capitalized, then how will the first month of the second half of the year be written?

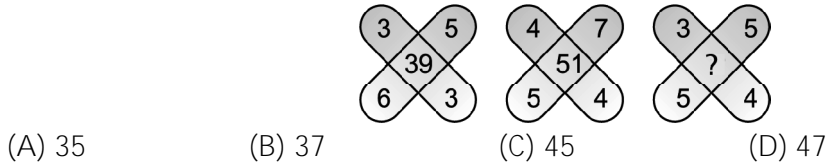
[   ]

(A) jUIY                      (B) AuGuSt                      (C) jUly                      (D) AugUst

10. Which figure is the next in the series? [ ]



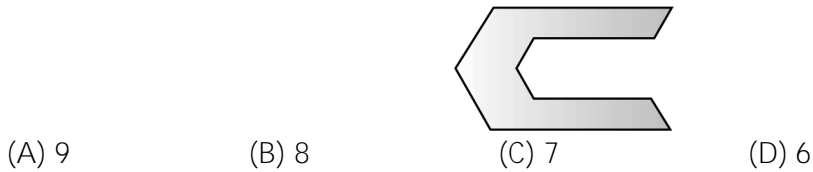
11. Find the missing number. [ ]



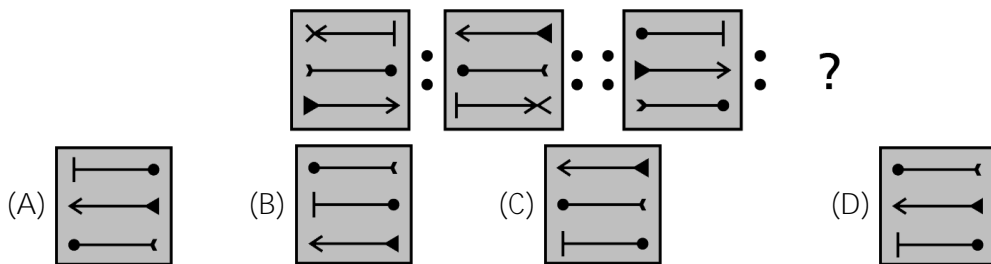
12. Choose the one which is different from the others [ ]

- (A) X23Y      (B) D45E      (C) T67U      (D) P98Q

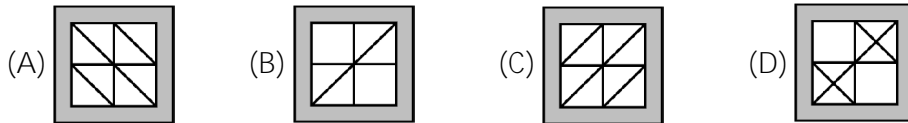
13. How many shapes like this  in the shape below? [ ]



14. Which shape or pattern completes the second pair in the same way as the first pair? [ ]



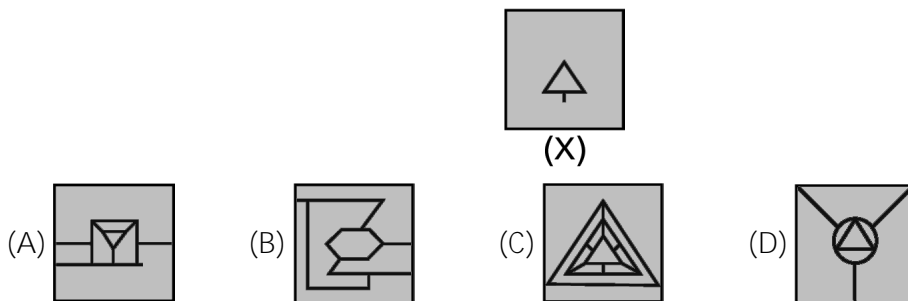
15. Find the mirror image of . [ ]



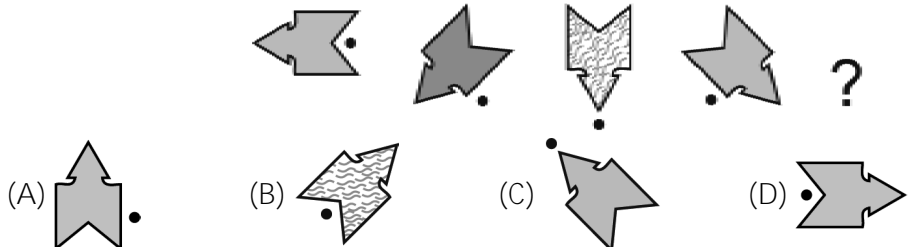
16. Which figure does not fit in? [ ]



17. In which larger shape is the small shape (X) hidden? [ ]



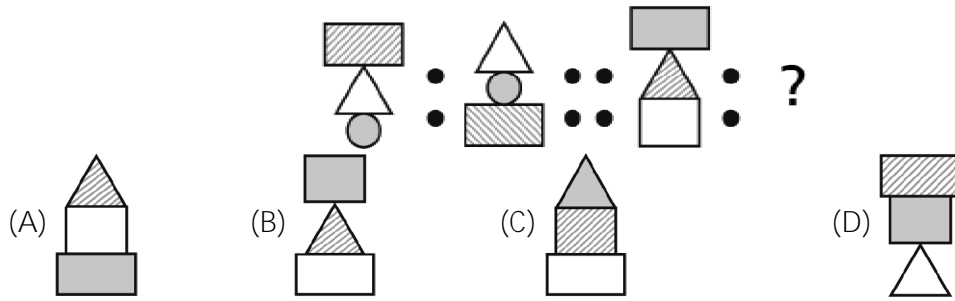
18. Which figure is the next in this series of figures? [ ]



19. Identify the mirror image NATIONAL [ ]

- (A) **JANOLAN** (B) **JANOITAN** (C) **JANOITAN** (D) **LANOITAN**

20. Which shape or pattern completes the second pair in the same way as the first pair? [ ]



21. In a row of forty children, P is thirteenth from the left end and Q is ninth from the right end. How many children are there between P and R if R is fourth to the left of Q? [ ]

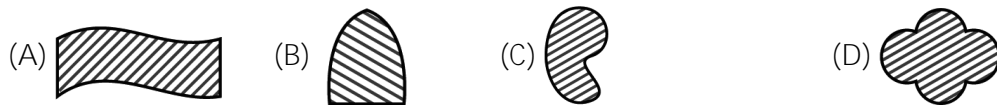
- (A) 12 (B) 13 (C) 14 (D) 15

22. Identify the next number in the series. [ ]

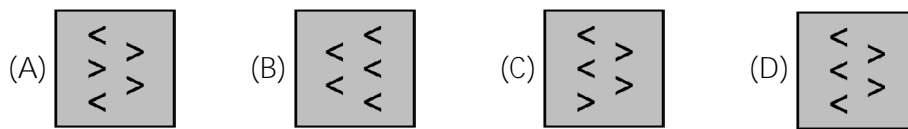
123, 234, 345, 456, \_\_\_\_\_.

- (A) 567 (B) 678 (C) 489 (D) 467

23. Which shape does not fit in with the others? [ ]



24. Find the mirror image of [ ]



25. Identify the matching pair. [ ]

