



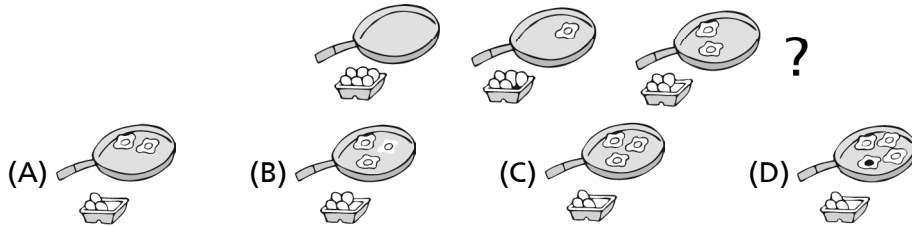
Chapters: 1 to 9

Class: 2

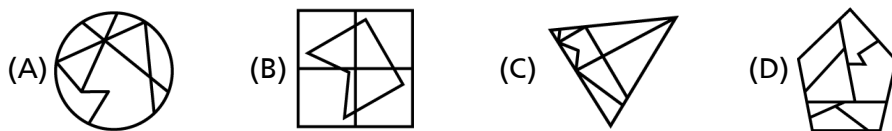
Maximum Marks: 25

Time: 35 Min.


1. What comes next in the series given? []



2. In which larger shape is the shape hidden? []



3. Find the odd one out. []

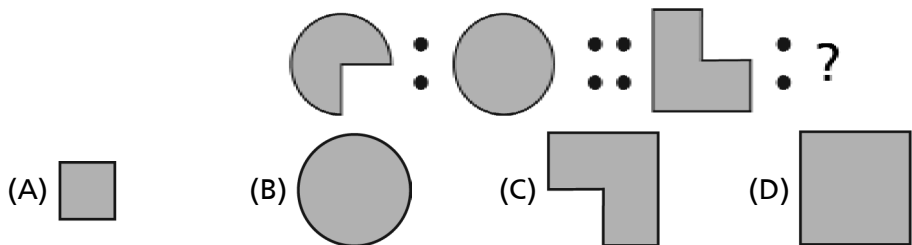


4. Study the diagram below. Find each pattern. Fill in the missing letters in the empty row. []

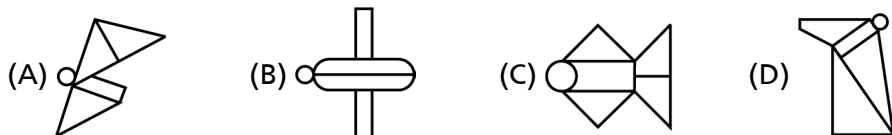
| | | | |
|---|---|---|---|
| X | U | R | O |
| O | X | U | R |
| R | O | X | U |
| ? | | | |

- (A) ORUX (B) ORRR (C) RUXU (D) XXXX

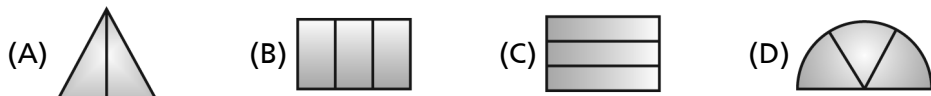
5. Find the matching pair. []



6. In which larger shape is the shape hidden? []



7. Find the odd one out. []

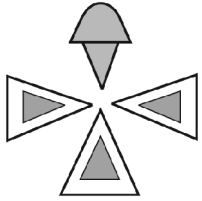


8. How many triangles are there in the figure? []



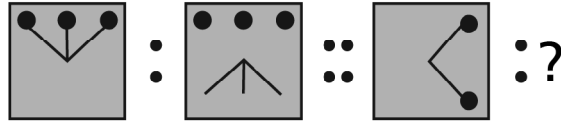
- (A) 2 (B) 3 (C) 4 (D) 5

9. How many triangles are there in the given figure? []



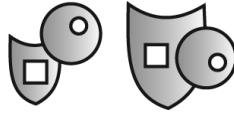
- (A) 4 (B) 3 (C) 6 (D) 7

10. Which pattern on the right completes the second pair in the same way as the first pair? []



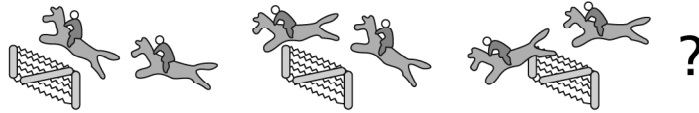
- (A) (B) (C) (D)

11. Which shape or pattern belongs to the group of shapes given below? []



- (A) (B) (C) (D)

12. What comes next in the series given? []



- (A) (B) (C) (D)

13. Study the number patterns. Fill in the missing numbers in empty row. []


| | | | |
|---|---|---|---|
| 8 | 7 | 6 | 5 |
| 7 | 6 | 5 | 4 |
| 6 | 5 | 4 | 3 |
| ? | | | |

- (A) 6789 (B) 2345 (C) 1234 (D) 5432

14. Find the odd one out. []

- (A) (B) (C) (D)

15. What comes next in the series given? []



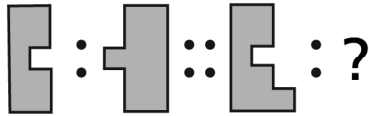
- (A) (B) (C) (D)

16. In which larger shape or pattern is the shape hidden? []

- (A) (B) (C) (D)

17. Find the matching pair.

[]



- (A) (B) (C) (D)

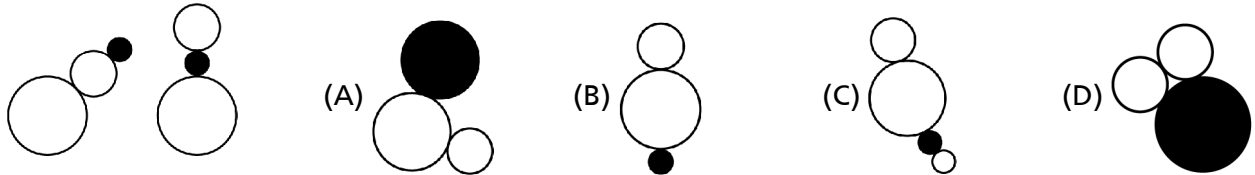
18. Which shape has 5 sides?

[]

- (A) (B) (C) (D)

19. Which shape or pattern belongs to the given group?

[]



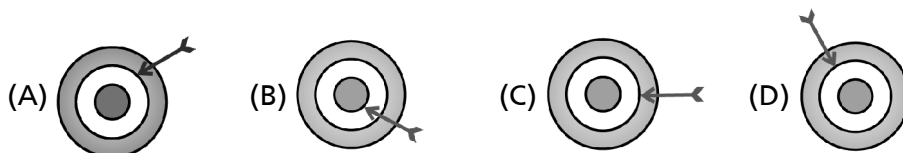
20. This solid is made up of 2 triangles and a

[]

- (A) Square (B) Rectangle (C) Circle (D) Oval

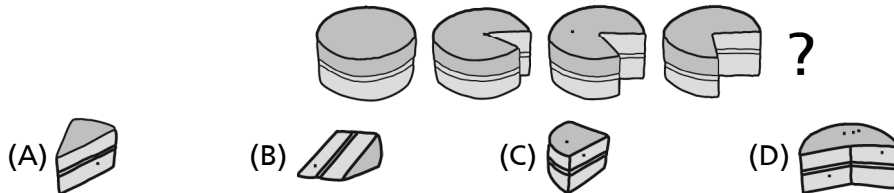
21. Find the odd one out.

[]



22. What comes next in the series given?

[]



23. Study the numbers in the diagrams below. Find each pattern. Fill in the missing numbers in the empty row.

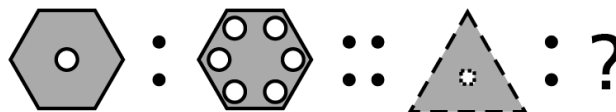
[]

| | | | |
|---|---|---|---|
| 8 | 7 | 6 | 5 |
| ? | | | |
| 6 | 5 | 4 | 3 |
| 5 | 4 | 3 | 2 |

- (A) 8765 (B) 7654 (C) 6578 (D) 5678

24. Find the matching pair.

[]



- (A) (B) (C) (D)

25. Which shape is similar to the group of three given below?

[]

