



Class: 1

Maximum Marks: 25


Time: 35 Min.

1. Which object is exactly the same as the one given below? []



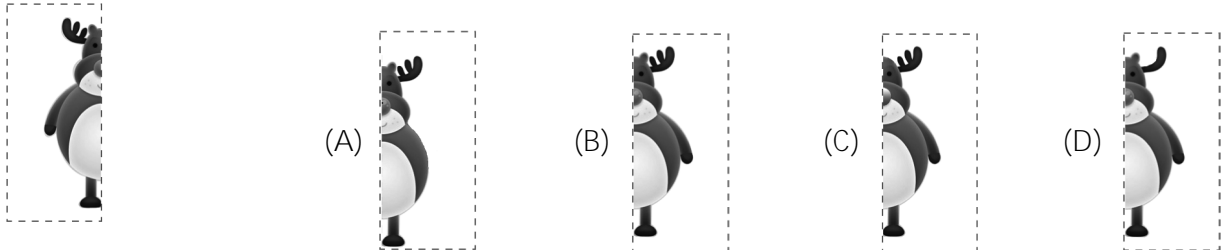
- (A) (B) (C) (D)

2. Which one comes next? []

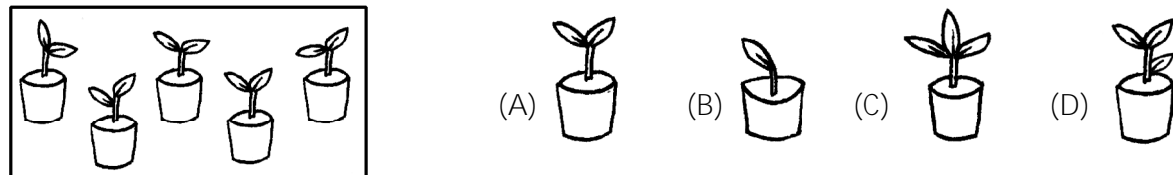


- (A) (B) (C) (D)

3. Choose the other half of the picture below. []



4. Identify the object that belongs to the group. []



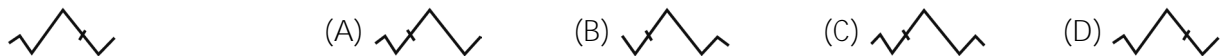
5. Find the odd one out. []

- (A) (B) (C) (D)

6. Find the matching pair. []



7. Which object is exactly the same as the one given? []



8. Which one comes next? []

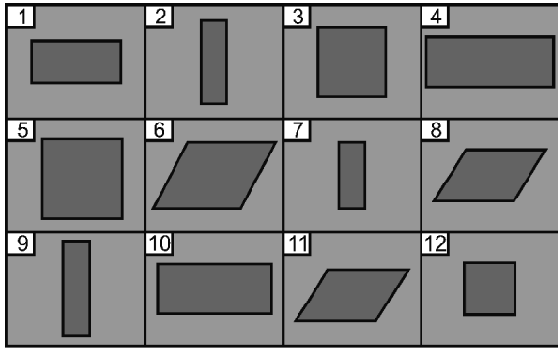


- (A) (B) (C) (D)

9. Which is the item that does not belong to the group? []

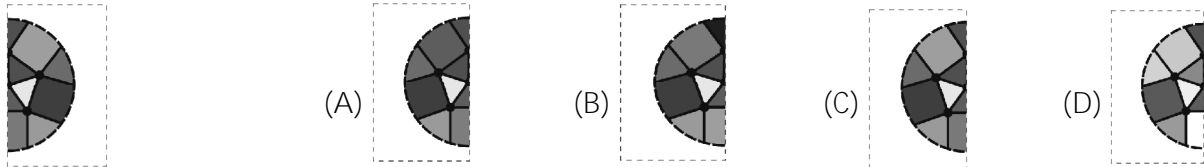
- (A) (B) (C) (D)

10. Study the figure below and identify the two shapes which are exactly the same. []

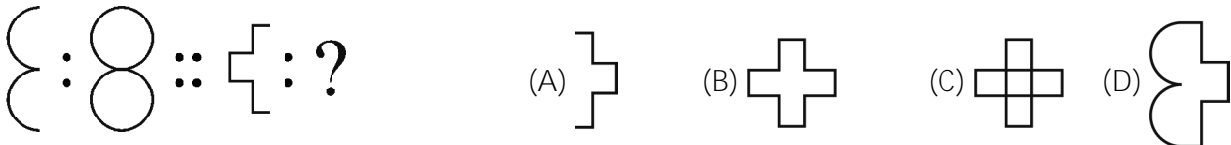


- (A) 3 and 5
- (B) 2 and 7
- (C) 8 and 11
- (D) 3 and 12

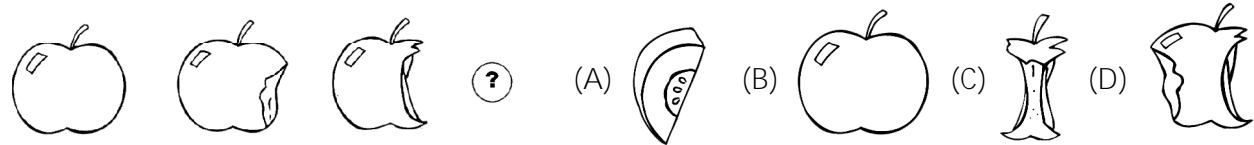
11. Find the other half of the picture given below. []



12. Find the matching pair. []



13. Which one comes next? []



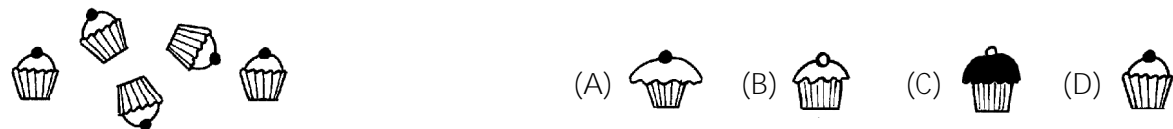
14. Which object is exactly the same as the one given? []



15. Which is the item that does not belong to the group? []




16. Identify the object that belongs to the group. []



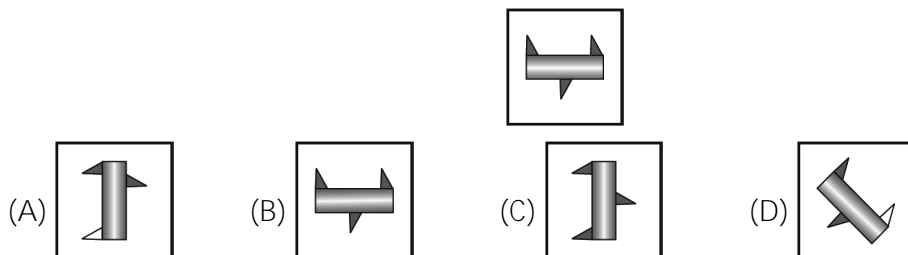
17. Find the matching pair. []



18. In which larger shape is  hidden? []



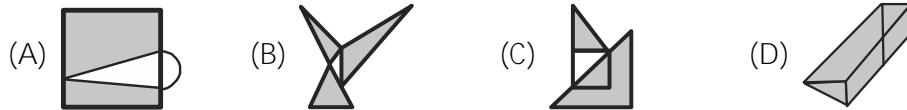
19. Which object is exactly the same as the one given? []



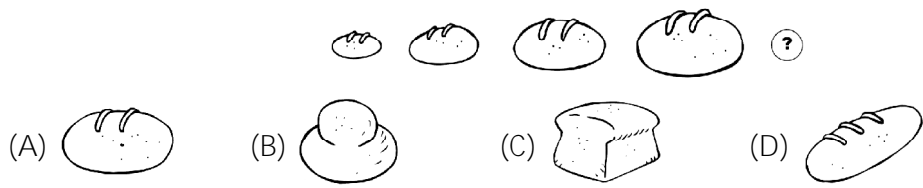
20. Which alphabet does not fit in with the others? []




21. In which larger shape is the shape  hidden? []



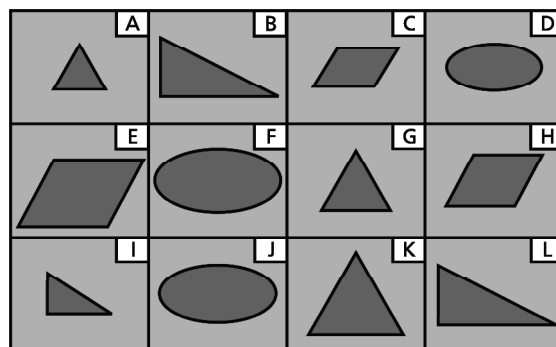
22. Which one comes next? []



23. Choose the other half of the face of the monster given below. []



24. Study the figure below and choose the two shapes which are exactly the same. []



(A) C and H (B) D and J (C) A and G (D) B and L

25. In which larger picture is the shape  hidden? []

