



Reasoning Trainer



Score

Chapters: 1, 2, 3, 4, 5 and 6

Class: 8

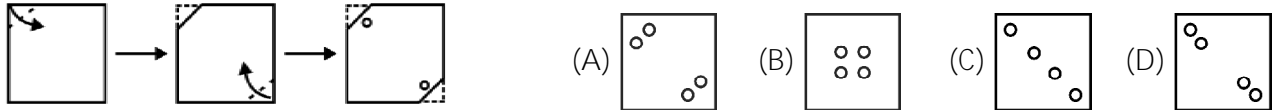
Maximum Marks: 25

Time: 35 Min.

1. Identify the figure which does not belong to the group. []



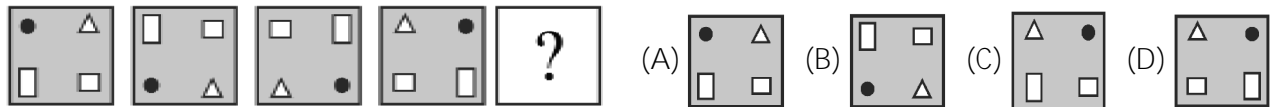
2. Find the figure which most closely resembles the unfolded piece of paper. []




3. A person walks 10 metres in front and 10 metres to the right. Then every time turning to his left, he walks 5, 15 and 15 metres respectively. How far is he now from his starting point? []

- (A) 15 m (B) 5 m (C) 10 m (D) 20 m

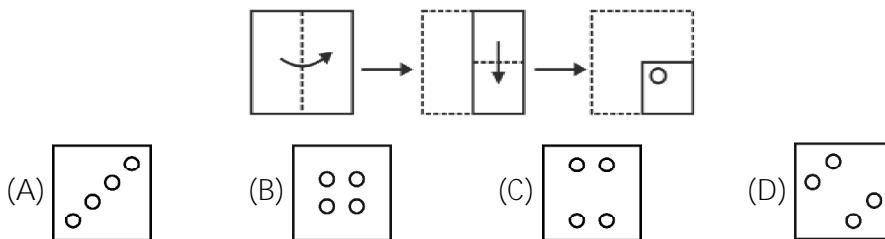
4. What comes next in the series below? []



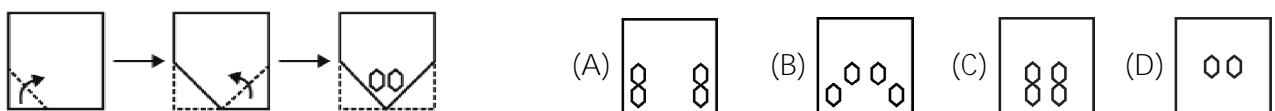
5. Find the number in place of the question mark. []



6. Select the correct alternative which would most closely resemble the paper when unfolded. []



7. Find the figure which most closely resembles the unfolded piece of paper. []



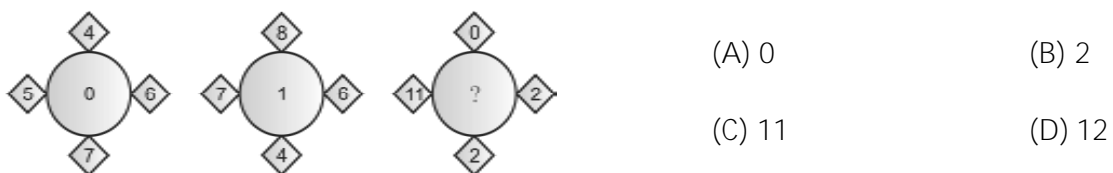
8. From a point, Victor started walking East and walked 35 m. He then turned to his right and walked 20 m. He again turned to right and walked 35 m. Finally, he turned to his left and walked 20 m and reached his destination. Now, how far is he from the starting point? []

- (A) 50 m (B) 55 m (C) 20 m (D) 40 m

9. Find the matching pair. REASON : SFBTPO :: THINK : ? []

- (A) SGHMJ (B) UIJOL (C) UHNKI (D) UJKPM

10. Which number will replace the question mark? []



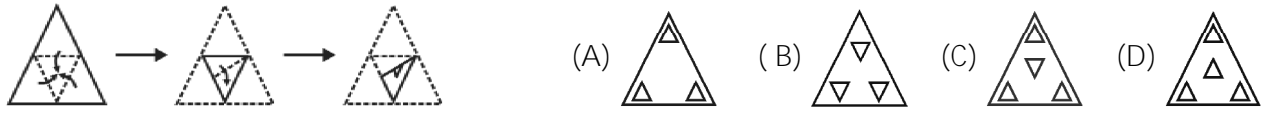
11. If X is to the South of Y and Z is to the East of Y, in what direction is X with respect to Z? []

- (A) North-East (B) North-West (C) South-East (D) South-West

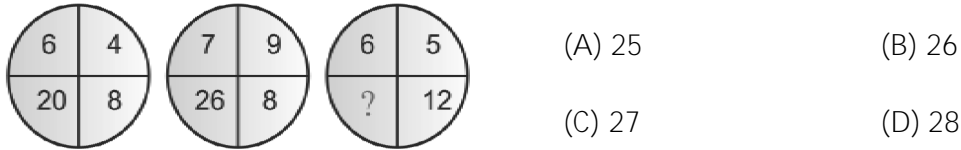
12. Identify the group that completes the series. KM5, IP8, GS11, EV14, ? []

- (A) BX17 (B) BY17 (C) CY17 (D) CY18

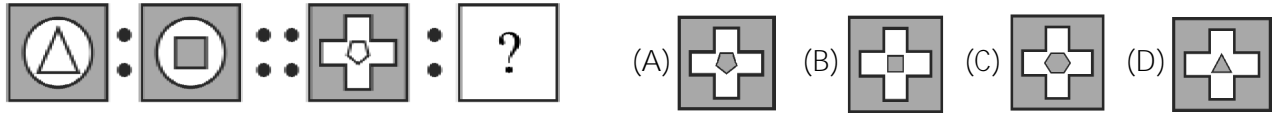
13. Find the figure which most closely resembles the unfolded piece of paper. []



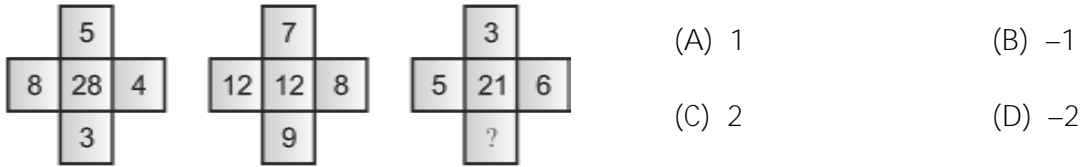
14. Which number will replace the question mark in the following? []



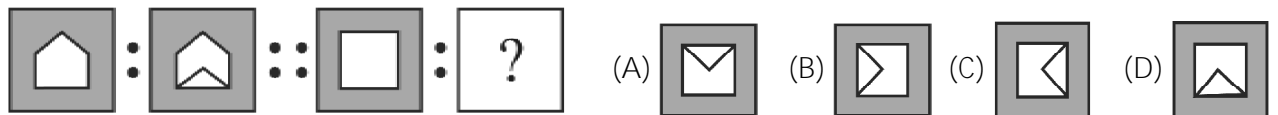
15. Which shape completes the matching pair? []



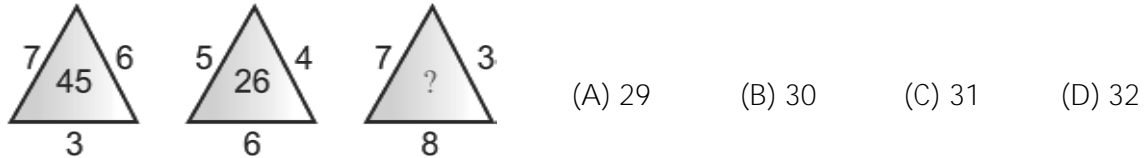
16. Find the missing number. []




17. Which shape completes the matching pair? []



18. Which number will replace the question mark in the following? []



19. Find the missing number. []



20. Choose the figure which replaces the ?. []



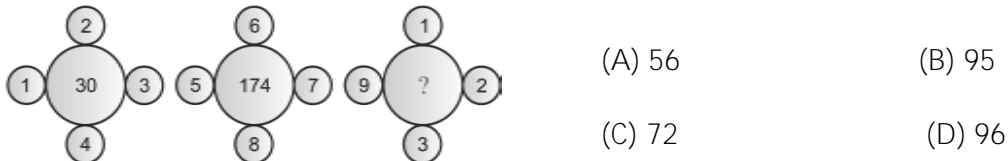
21. Vishnu went 15 km to the West from his house, then turned left and walked 20 km. He then turned East and walked 25 km and finally turning left covered 20 km. How far is he now from his house? []

- (A) 15 km (B) 20 km (C) 25 km (D) 10 km

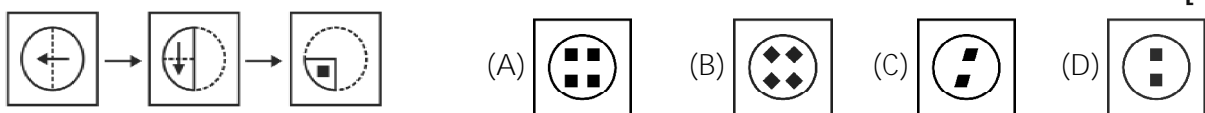
22. Identify the number which is different from the rest. []

- (A) 706 (B) 507 (C) 489 (D) 250

23. Which number will replace the question mark in the following? []



24. Select the correct alternative which would most closely resemble the paper when unfolded. []



25. Find the missing number. []

