



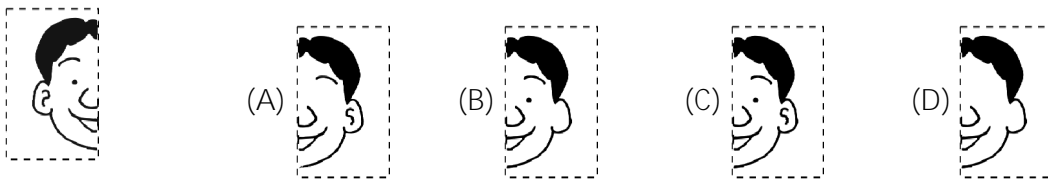

## Chapters: 1, 2, 3, 4, 5 and 6

**Class: 1**
**Maximum Marks: 25**
**Time: 35 Min.**

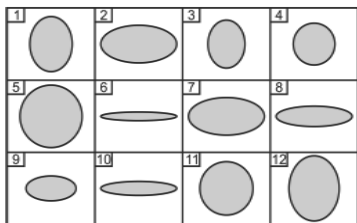
1. Find the matching pair. [   ]



2. Find the other half of the face shown below. [   ]



3. Study the figure and identify the two shapes which are exactly the same. [   ]

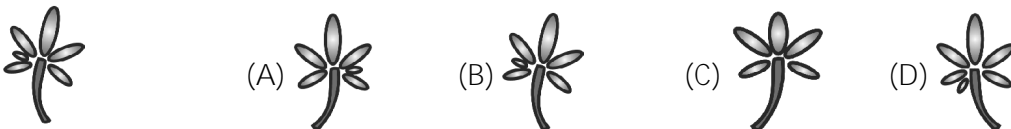


- (A) 6 and 10                      (B) 2 and 7  
(C) 2 and 8                      (D) 5 and 12

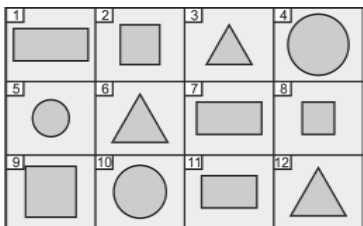
4. Which one does not belong to the group? [   ]



5. Which object is exactly the same as the one given? [   ]

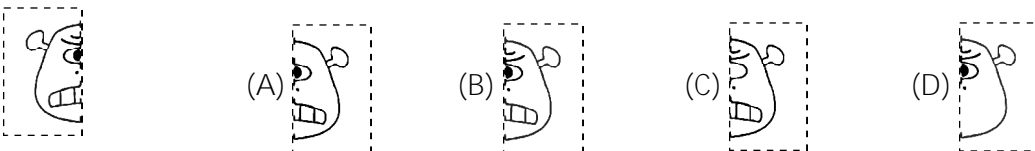


6. Study the figure and identify the two shapes which are exactly the same. [   ]

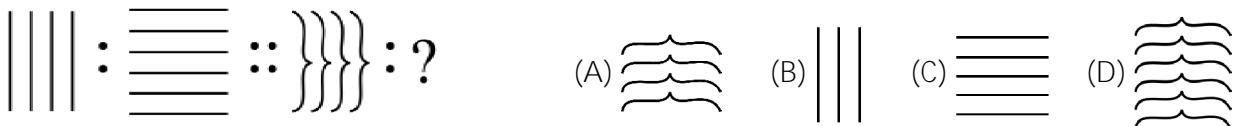


- (A) 3 and 12                      (B) 1 and 7  
(C) 6 and 12                      (D) 4 and 10

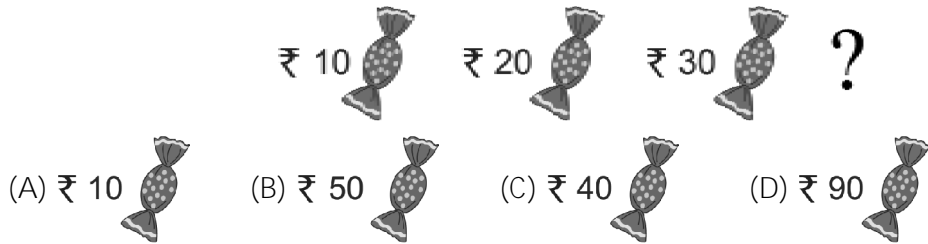
7. Choose the other half of the face of the monsters given below. [   ]



8. Which pattern completes the second pair in the same way as the first pair? [   ]



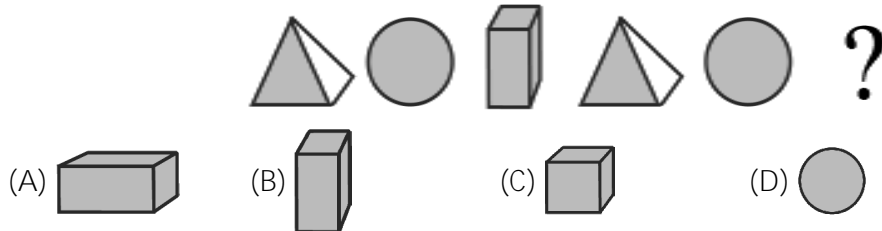
9. Which one comes next? [ ]



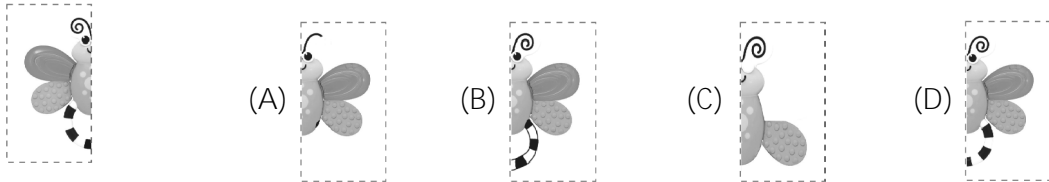
10. Which object is exactly the same as the one given? [ ]



11. Which one comes next? [ ]



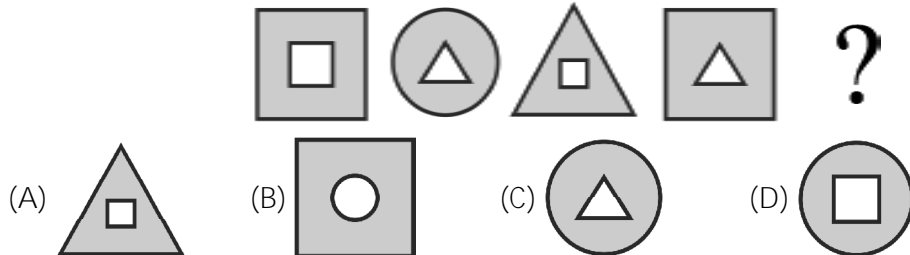
12. Choose the other half of the picture given below. [ ]



13. Identify the one different from the rest. [ ]



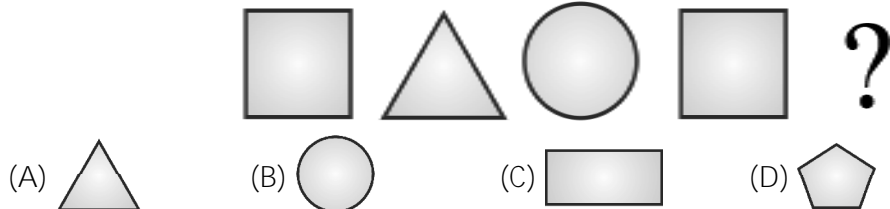
14. Which one comes next? [ ]



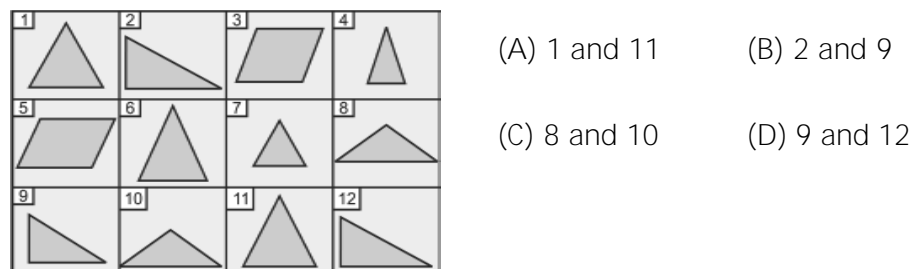
15. Which object is exactly the same as the one given? [ ]



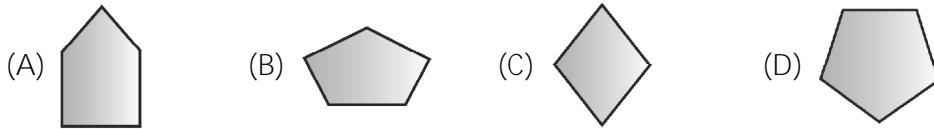
16. What is the missing pattern in the sequence below? [ ]



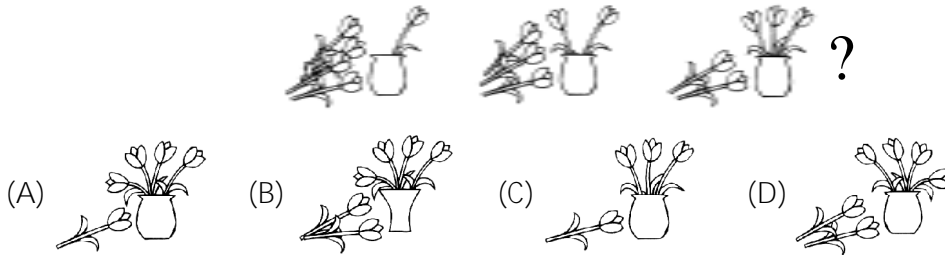
17. Which two figures are the same? [ ]



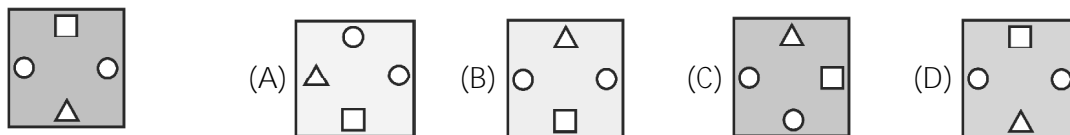
18. Find the odd one out. [ ]



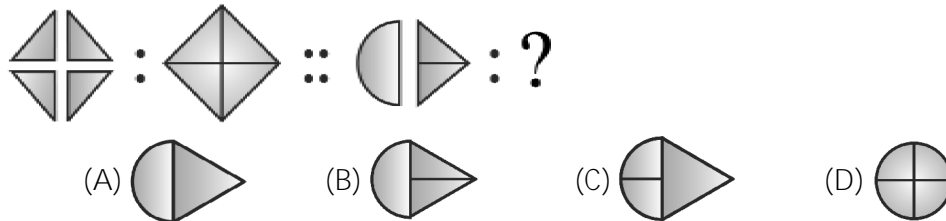
19. Which one comes next? [ ]



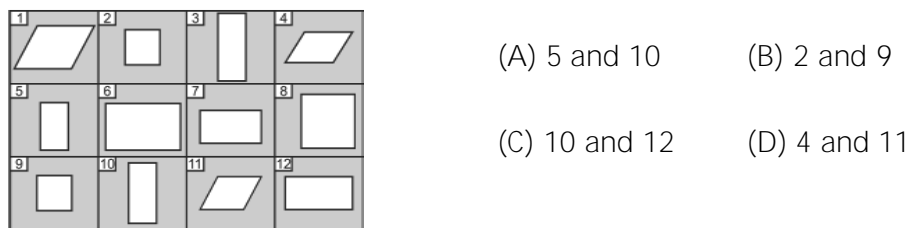
20. Which object is exactly the same as the one given? [ ]



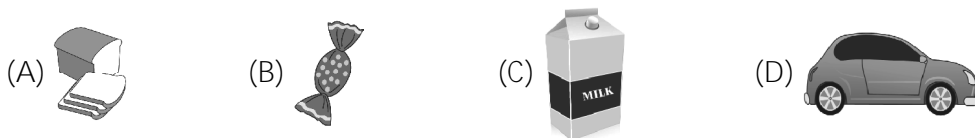
21. Find the matching pair. [ ]




22. Study the figure and identify the two shapes which are exactly the same. [ ]



23. Which is the item that does not belong to the group? [ ]



24. Study the figure and identify the two shapes which are exactly the same. [ ]



25. Which object is exactly the same as the one given below? [ ]

