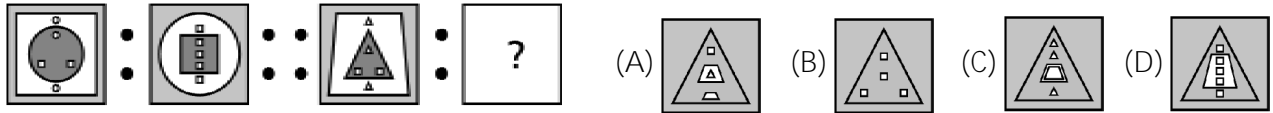


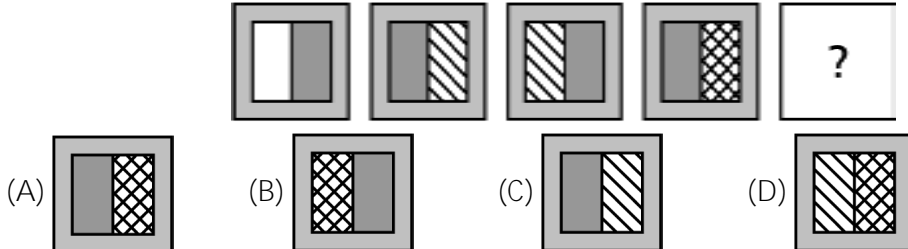


Class: 9
Maximum Marks: 25
Time: 35 Min.

1. Which shape completes the second pair same as the first pair? []



2. Find the figure that comes next in the series. []



3. Which shape completes the second pair in the same way as the first pair? []



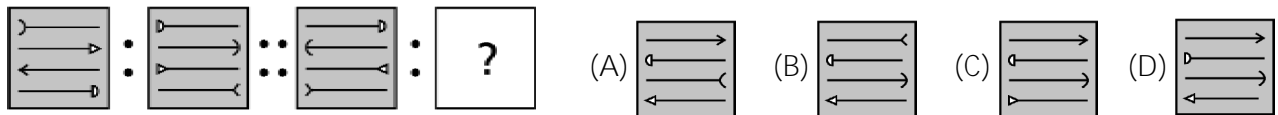
4. Find the letter which replaces the question mark [WFB, TGD, QHG, ?] []

(A) NIJ (B) NIK (C) NJK (D) OIK

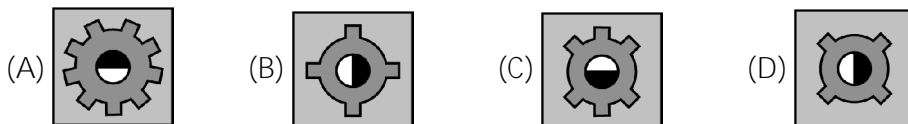
5. Which number is different from the others? []

(A) 131 (B) 151 (C) 161 (D) 171

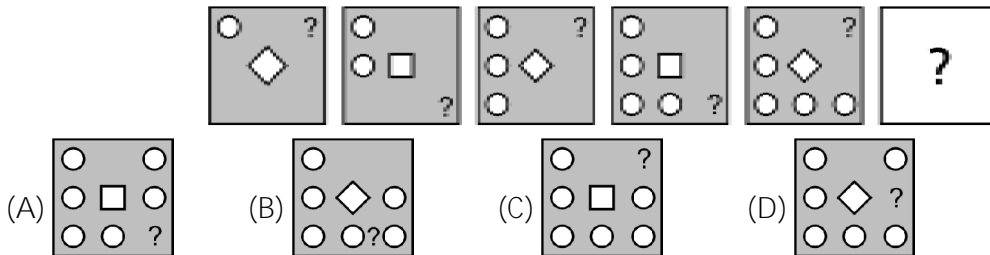
6. Which shape completes the second pair in the same way as the first pair? []



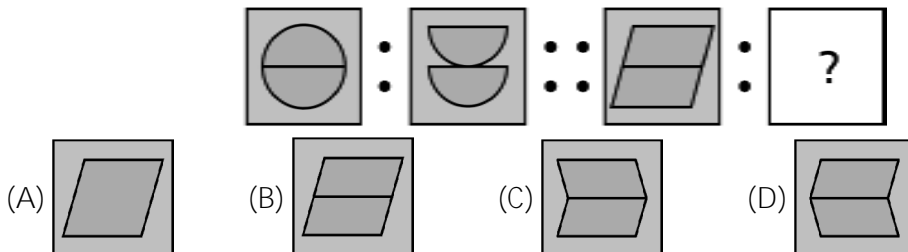
7. Choose the figure that does not belong to the group. []



8. Find the figure that comes next in the series. []



9. Which shape completes the second pair in the same way as the first pair? []



10. Choose the group of letters which is different from the others. []

(A) VXZ (B) GIL (C) SUX (D) ACF

11. Identify the pair that exactly replaces the question mark. []

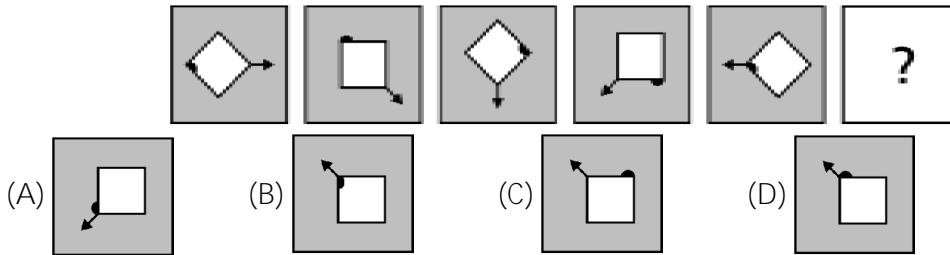
W-144, ?, S-100, Q-81, O-64

(A) U-121 (B) U-122 (C) V-121 (D) V-128

12. Find the matching pair 26 : 169 :: 30 : ? []

(A) 225 (B) 125 (C) 325 (D) 144

13. Find the figure that comes next in the series. []

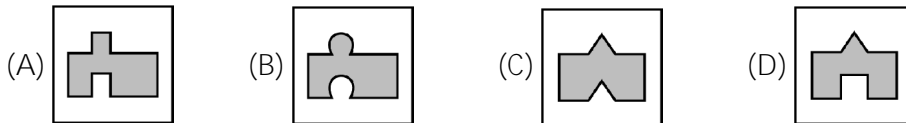


14. Find the number that replaces the question mark. []

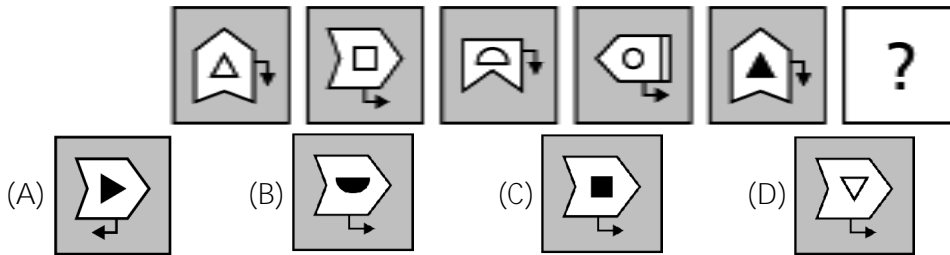
83, 82, 81, ?, 69, 60, 33

(A) 73 (B) 80 (C) 75 (D) 77

15. Identify the odd one among the given alternatives. []



16. Find the figure that comes next in the series. []



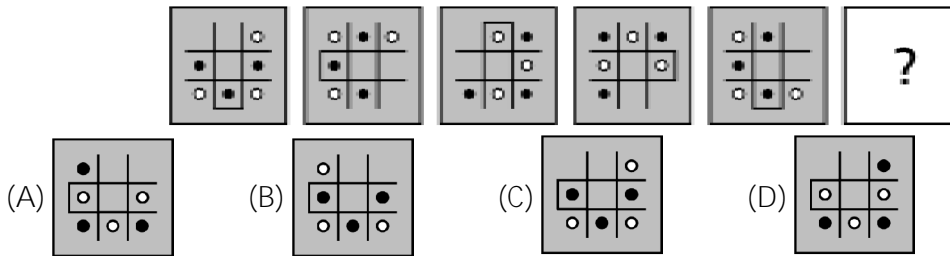
17. Identify the odd one among the given alternatives. []



18. Find the missing number in place of the question mark. [81, 144, 225, ?, 441, 576] []

(A) 342 (B) 324 (C) 234 (D) 328

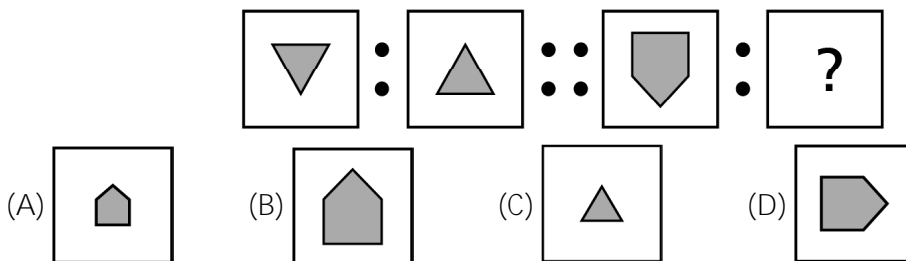
19. Find the figure that comes next in the series. []



20. Find the figure which is different from the others. []



21. Which shape completes the second pair in the same way as the first pair? []



22. Identify the group that completes the series. [a b - c - c - a - a b - a - cc] []

(A) b b c c a b (B) a a b c b a (C) c b a c b b (D) b a c b b c

23. Choose the group of letters which is different from the others. []

(A) DFCE (B) HIGJ (C) NPMO (D) ZXWY

24. Which group of alphabet completes the second pair as the first? []

ADE : FGJ :: KNO : ?

(A) PQR (B) PQT (C) RQP (D) TPR

25. Identify the odd one among the given alternatives. []

