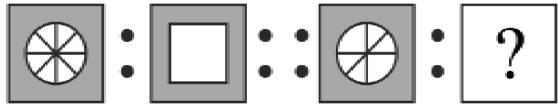




Class: 7
Maximum Marks: 25
Time: 35 Min.

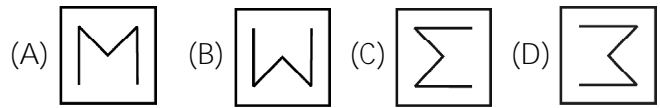
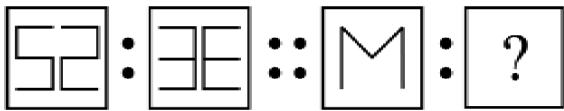
1. Find the matching pair.



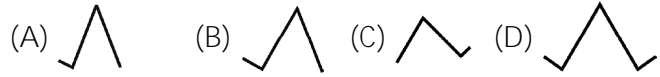
2. Find the odd one out.

(A) 12 (B) 13 (C) 15 (D) 18

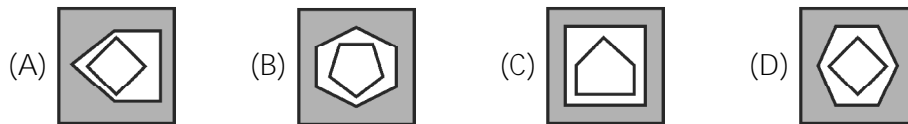
3. Find the correct figure which replaces the "?".



4. Identify the figure in the place of the question mark.



5. Choose the figure which is different from the rest.



6. Choose the correct alternative which replaces the question mark. [6, 11, 21, 36, 56, ?].

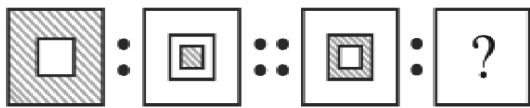
(A) 51 (B) 91 (C) 42 (D) 81

7. Find the matching pair.

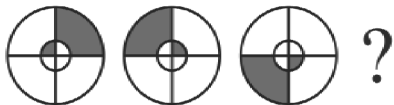
PASS : QBTT :: FAIL : ?

(A) GJBM (B) GBJM (C) MBJG (D) MJBG

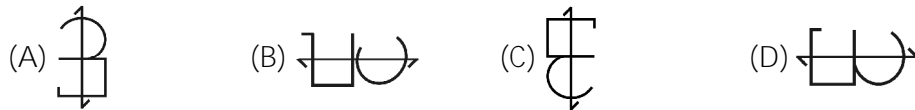
8. Find the correct figure which replaces the "?".



9. What comes next?



10. Which shape is different from the others?

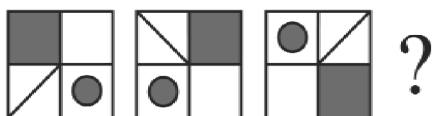


11. Find the correct set of letters which replaces the "?".

CAT : DDY :: BIG : ?

(A) CLL (B) CLM (C) CML (D) CEP

12. What comes next?



13. What comes next in the series below?

DE, HI, LM, PQ, ?

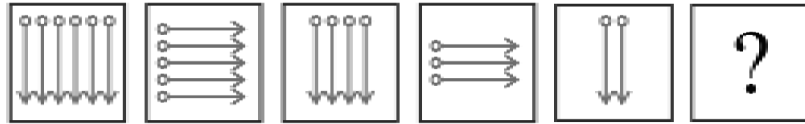
(A) QR (B) RS (C) ST (D) TU

14. What comes next in the series below?

90, 75, 62, 51, 42, ?

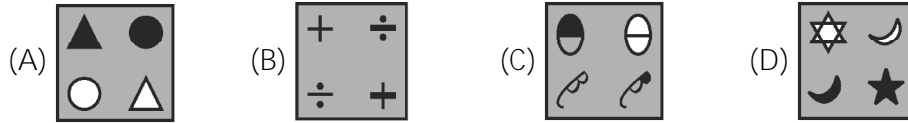
(A) 33 (B) 27 (C) 35 (D) 29

15. What comes next in the series below? []



- (A) (B) (C) (D)

16. Find out the figure which is different from others. []




17. Identify the matching pair. []

$$3 : 11 :: 7 : ?$$

- (A) 22 (B) 29 (C) 18 (D) 51

18. Find the correct figure which replaces the "?". []



- (A) (B) (C) (D)

19. Choose the figure which is different from the rest. []



20. Find the odd one out. []

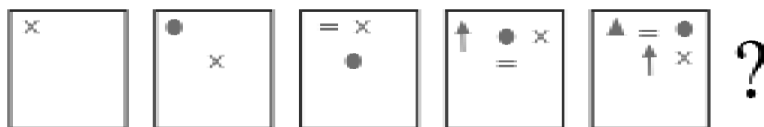
- (A) ZA (B) XC (C) BY (D) VE

21. Find the correct number which replaces the "?". []

$$25 : 37 :: 49 : ?$$

- (A) 41 (B) 56 (C) 60 (D) 65

22. What comes next? []



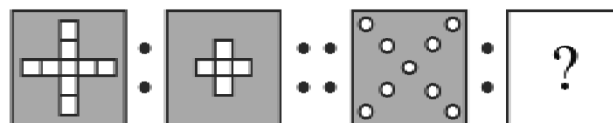
- (A) (B) (C) (D)

23. What comes next in the series below? []

$$61, 53, 45, 37, 29, ?$$

- (A) 23 (B) 21 (C) 19 (D) 16

24. Find the correct figure which replaces the "?". []



- (A) (B) (C) (D)

25. Find the one which does not belong to the group below. []

- (A) 64 (B) 84 (C) 16 (D) 36