



Chapters: 1, 2 and 3

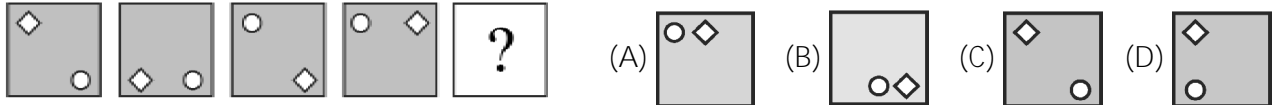
Class: 6

Maximum Marks: 25

Time: 35 Min.

1. Find the matching pair. AZBY : CXDW :: EVFU : ? []
 (A) GTHS (B) GHTS (C) GSTH (D) TGSH

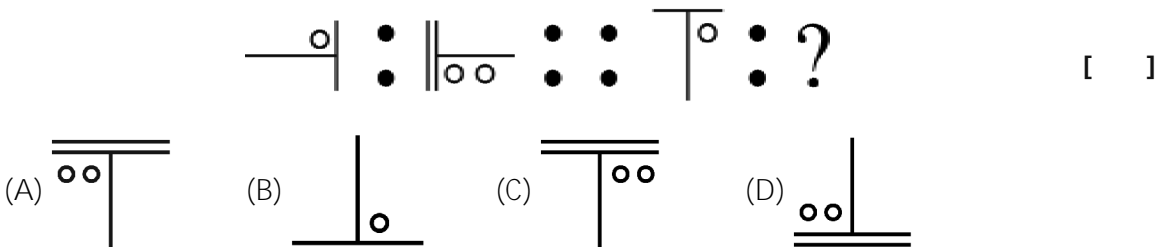
2. What comes next? []



3. Find the odd one out. []



4. Which shape or pattern completes the second pair in the same way as the first pair?



5. Find the figure which comes next in the series. []

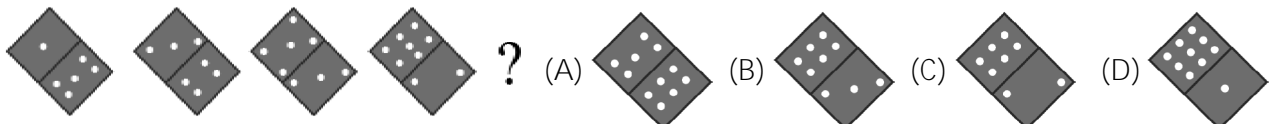


6. Identify the odd one out. []

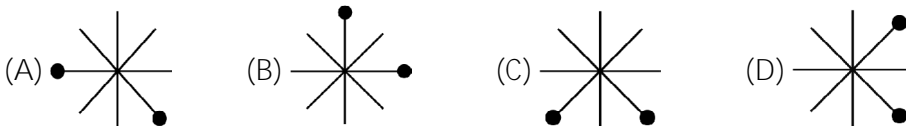


7. Find the matching pair. 2 : 8 :: 5 : ? []
 (A) 25 (B) 125 (C) 50 (D) 250

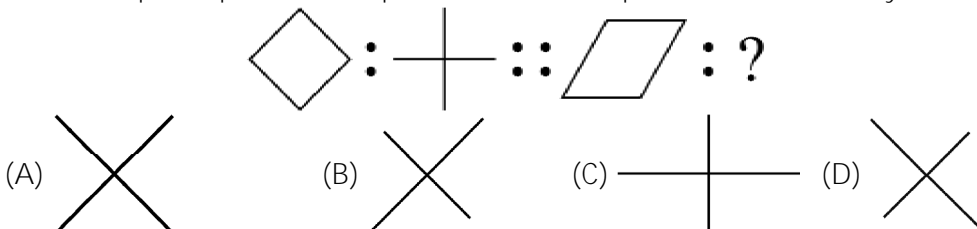
8. Find the figure which comes next in the series. []



9. Which is different from the others? []

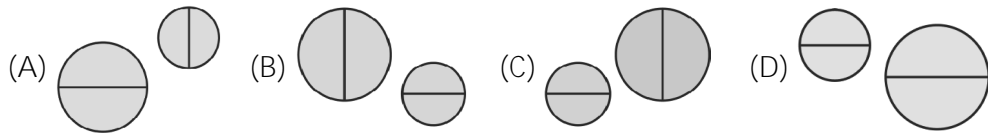


10. Which shape or pattern completes the second pair in the same way as the first pair? []

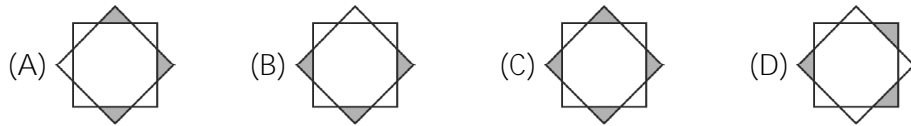
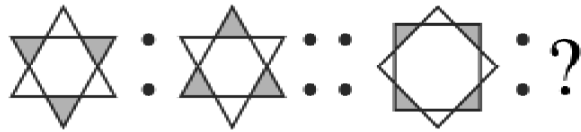


11. What is the next letter in the series given Y, W, U, S, Q, (?) []
 (A) O (B) P
 (C) Q (D) R

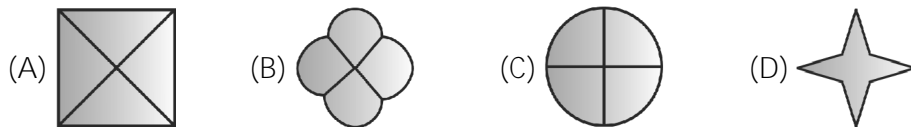
12. Identify the odd one out. []



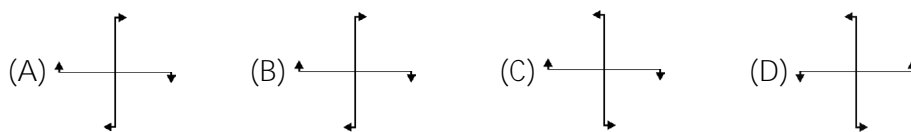
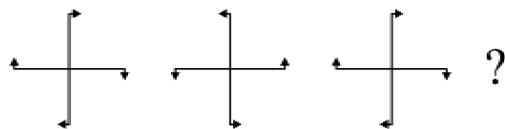
13. Which pattern completes the second pair in the same way as the first pair? []



14. Which is different from the others? []



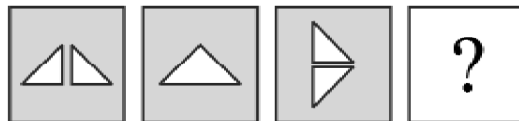
15. Find the figure which comes next in the series. []



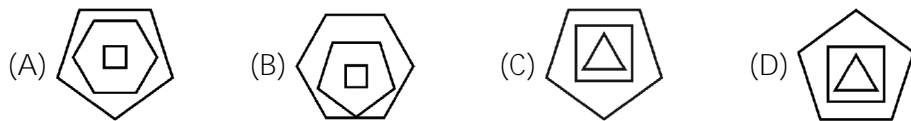
16. Which is the odd one out? []



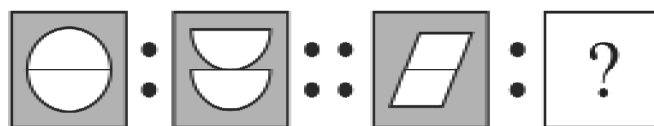
17. What comes next? []



18. Which is different from the others? []



19. Identify the matching pair for the following figures. []



20. Find the missing number in the following series. []

1, 8, 27, 64, ?, 216

- (A) 127 (B) 125 (C) 124 (D) 128

21. What comes next?

[]



- (A) (B) (C) (D)

22. Choose the one which is different from the others.

[]



23. What comes next?

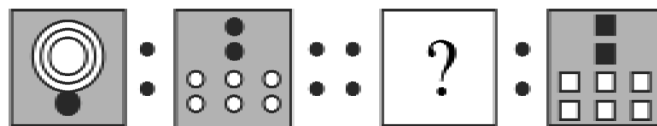
[]



- (A) (B) (C) (D)

24. Which shape or pattern completes the second pair in the same way as the first pair?

[]



- (A) (B) (C) (D)

25. Which figure is different from the others?

[]

