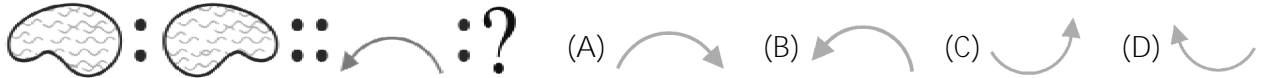




**Class: 4**
**Maximum Marks: 25**
**Time: 35 Min.**

1. Identify the matching pair.

[   ]



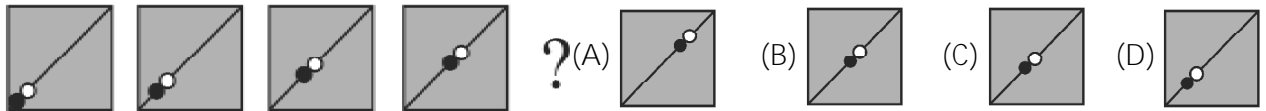
2. Which figure does not fit in?

[   ]



3. Which one comes next?

[   ]




4. Which is the next figure in the series?

[   ]



5. Which shape is the odd one out?

[   ]



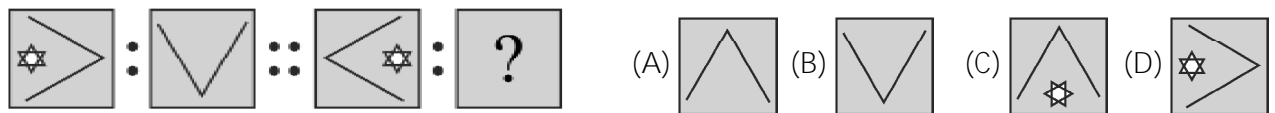
6. Which shape is next in this series of shapes?

[   ]



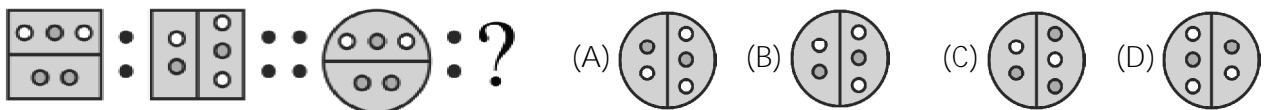
7. Find the figure which replaces the question mark.

[   ]



8. Which shape completes the matching pair?

[   ]



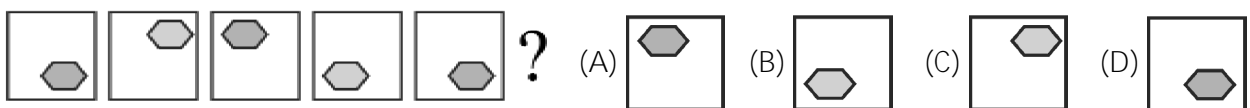
9. Which shape does not fit in with the others?

[   ]



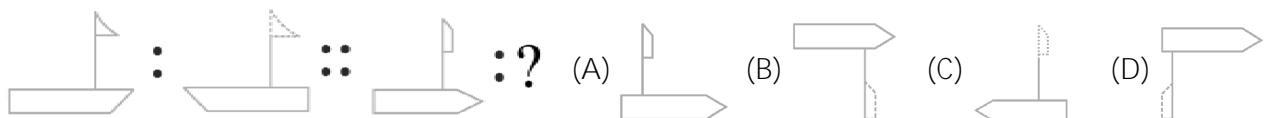
10. What comes next in the following series?

[   ]

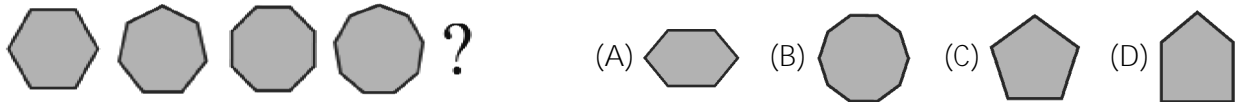


11. Find the figure which replaces the question mark.

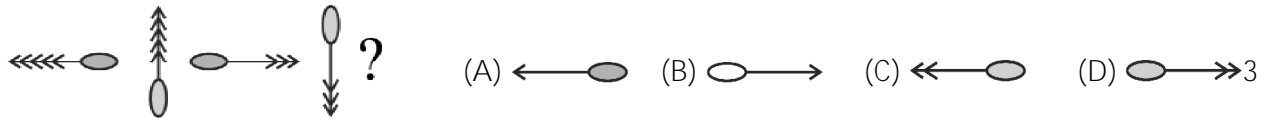
[   ]




12. Which is the next shape? [ ]



13. What comes next in the following series? [ ]



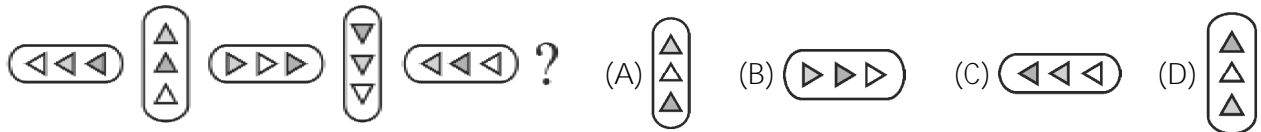
14. Which figure does not fit in with the other figures? [ ]



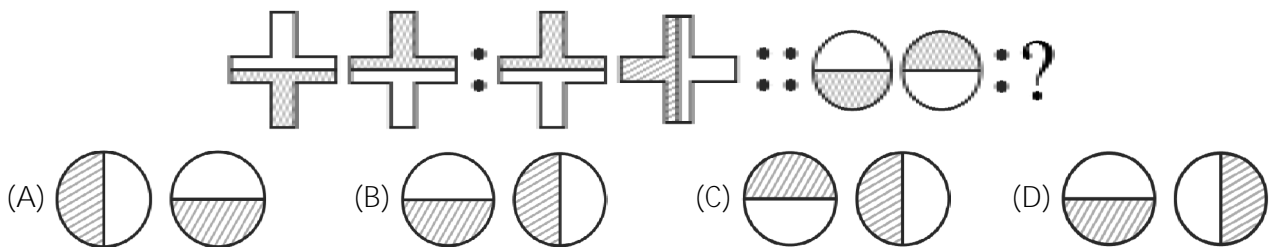
15. Which shape or pattern completes the second pair in the same way as the first pair? [ ]



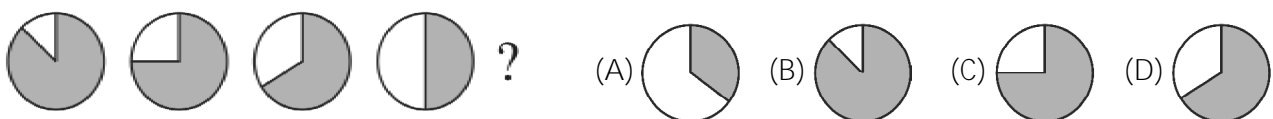
16. What comes next in the following series? [ ]



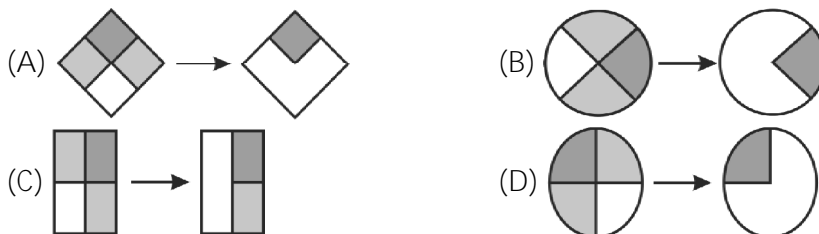
17. Find the figure which replaces the question mark. [ ]



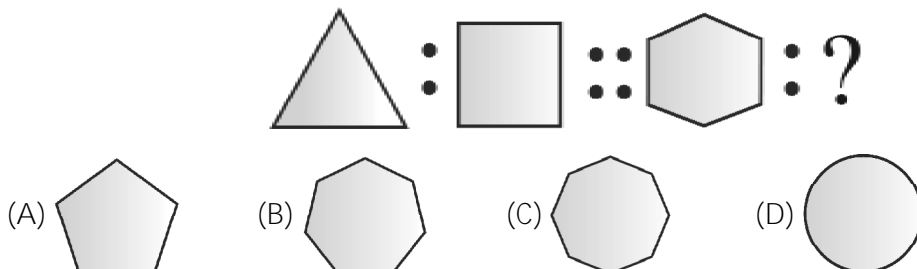
18. Which is the next shape? [ ]



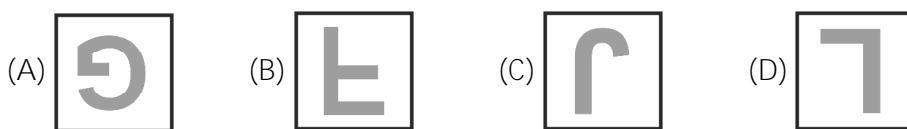
19. Which pair is the odd one out? [ ]



20. Find the figure which replaces the question mark. [ ]



21. Which letter is the odd one out? [ ]



22. Find the figure which replaces the question mark.

[ ]



- (A) (B) (C) (D)

23. Which shape is next in the series?

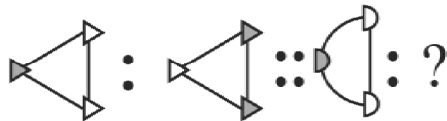
[ ]



- (A) (B) (C) (D)

24. Find the figure which replaces the question mark.

[ ]



- (A) (B) (C) (D)

25. Identify the odd one out.

[ ]

- (A) (B) (C) (D)