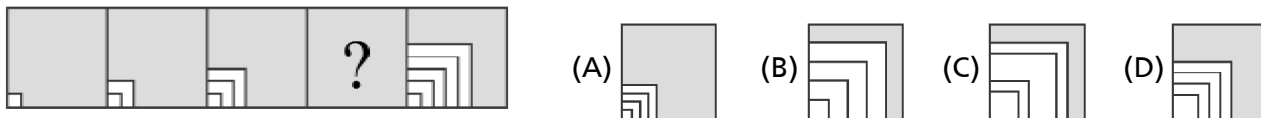


11. What comes in the place of question mark? []



12. Find the odd one out. []



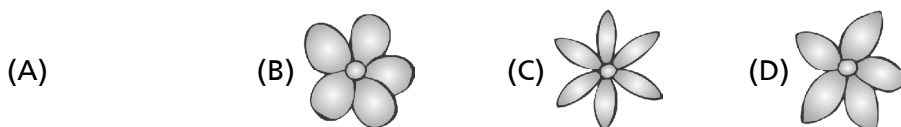
13. Find the matching pair. []



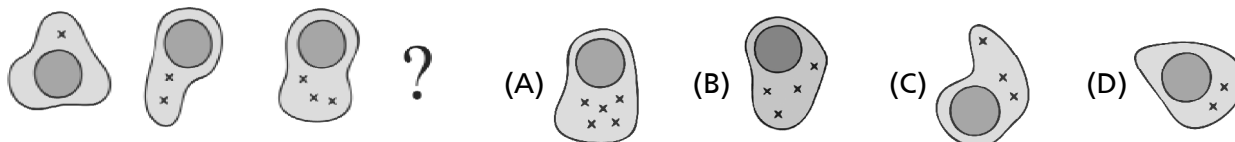
14. What comes next in the series given? []



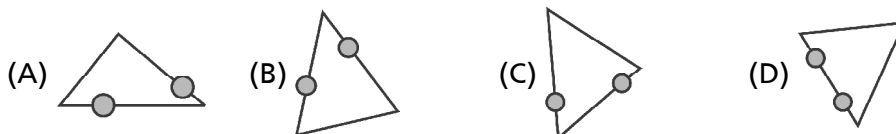
15. Which is the odd one out? []



16. What comes next in the series given? []



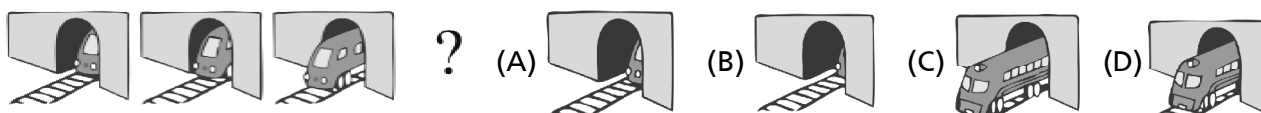
17. Find the odd one out. []



18. Find the figure which comes in the place of the question mark. []



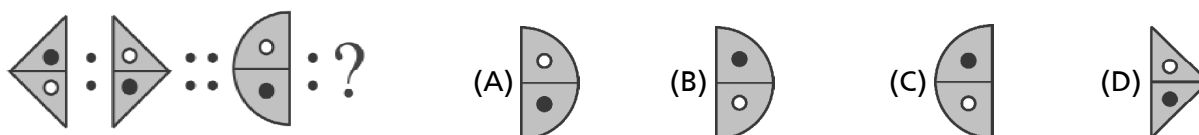
19. What comes next in the series given? []



20. Find the odd one out. []



21. Find the matching pair. []



22. Find the odd one out. []

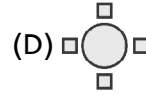
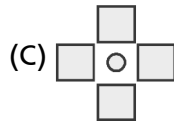
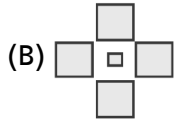
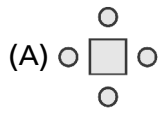
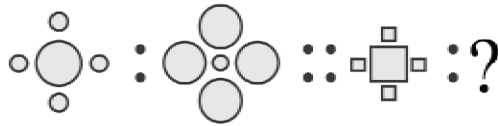


23. What comes next in the series given? []



24. Find the matching pair.

[]



25. Find the odd one out.

[]

