



Class: 10
Maximum Marks: 25
Time: 35 Min.

1. Identify the group which is different from the others. []

- (A) CZHK (B) MLAG (C) XUBU (D) SEN0

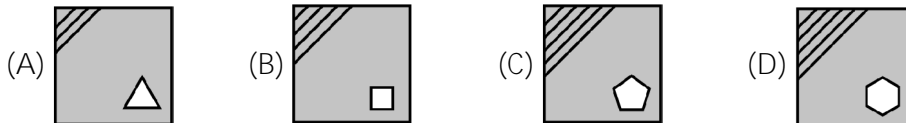
2. Which group of letters completes the matching pair. [CEDH : HDEC :: ? : PNRV] []

- (A) VRNP (B) RNPV (C) NRVP (D) VNRP

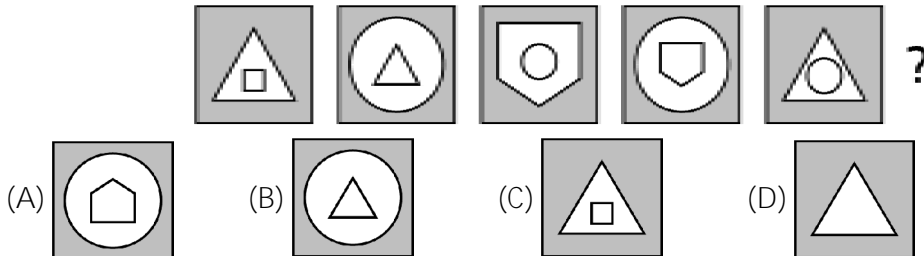
3. What comes next? BEH, KNQ, TWZ, ? []

- (A) IJL (B) CFI (C) BDF (D) ADG

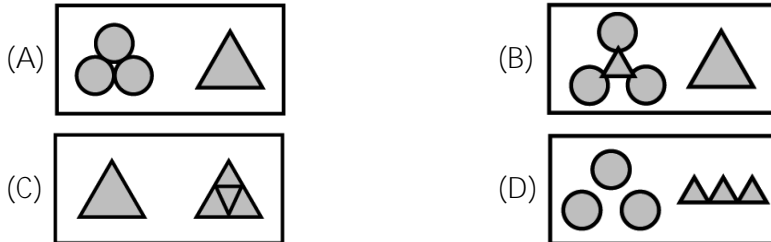
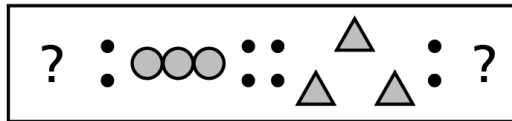
4. Find the odd one out. []



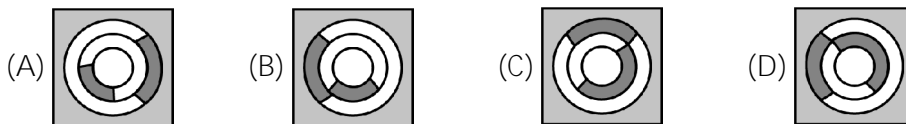
5. What comes next? []



6. Identify the possible pair satisfying the relation below. []



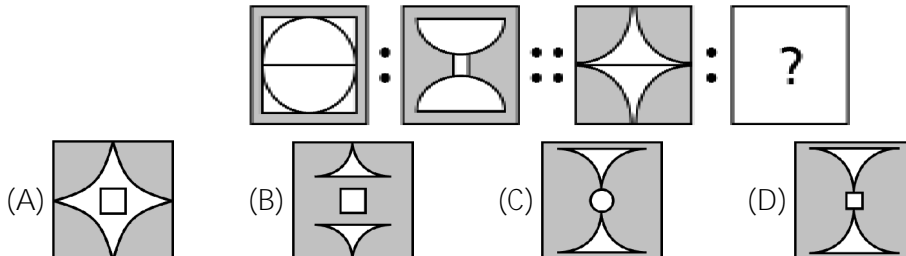
7. Identify the odd one out. []



8. What comes next in the given series? [8, 4, 12, 6, 18, ?, 27] []

- (A) 10 (B) 27 (C) 18 (D) 24

9. Which shape or pattern completes the second pair in the same way as the first pair? []



10. Choose the one which is different from the others. []

- (A) 119 (B) 136 (C) 147 (D) 153

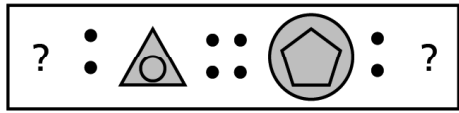
11. Complete the series. [Abc, dEf, GhI, jKl, ?] []

- (A) MnO (B) mNo (C) MNO (D) mno

12. Identify the odd one out. []



13. Identify the possible pair satisfying the relation below. []



- (A) (B)
- (C) (D)

14. What comes next? []



- (A) (B)
- (C) (D)

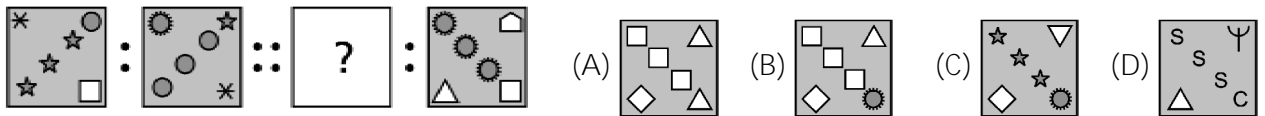
15. Find the odd one out. []

- (A) (B)
- (C) (D)

16. Identify the odd one out. []

- (A) (B)
- (C) (D)

17. Which shape or pattern completes the second pair in the same way as the first pair?

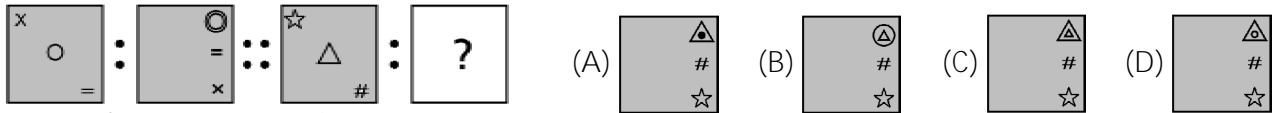


- (A) (B)
- (C) (D)

18. What comes next? [2Z5, 7Y7, 14X9, 23W11, 34V13, ?] []

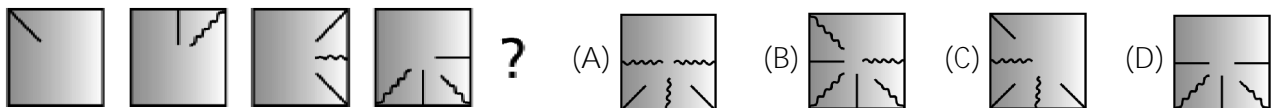
- (A) 27U24 (B) 47U15 (C) 45U15 (D) 47U14

19. Which shape or pattern completes the second pair in the same way as the first pair? []



- (A) (B)
- (C) (D)

20. What comes next? []



- (A) (B)
- (C) (D)

21. In each of the following questions one out of the four alternatives contains letters of the alphabet placed in a particular form. Find the one that does not belong to the group.

- (A) 8-27 (B) 125-216 (C) 343-512 (D) 1009-1331 []

22. What comes next? []

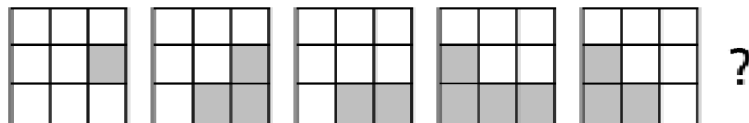


- (A) (B)
- (C) (D)

23. Find the matching pair. [48 : 122 :: 168 : ?] []

- (A) 284 (B) 286 (C) 288 (D) 290

24. Find the figure which comes next in the series given. []



- (A) (B)
- (C) (D)

25. Identify the odd one out. []

- (A) (B)
- (C) (D)